

**UNIVERSITY OF SWAZILAND****FINAL EXAMINATION PAPER**

PROGRAMME: **BACHELOR OF SCIENCE IN CONSUMER
SCIENCES AND CONSUMER SCIENCES
EDUCATION YEAR IV.**

COURSE CODE: **FRHD 402**

TITLE OF PAPER: **HOME MANAGEMENT**

TIME ALLOWED: **TWO (2) HOURS**

INSTRUCTIONS: **ANSWER QUESTION ONE (1) AND ANY
OTHER TWO (2) QUESTIONS.**

**DO NOT OPEN THIS PAPER UNTIL PERMISSION HAS BEEN GRANTED BY
THE CHIEF INVIGILATOR.**

QUESTION 1(Compulsory)

Decision making is crucial in management. A number of components are involved in the decision making process. Discuss the elements listed below:

- a) The kind of decision under consideration (20)
- b) The situation where decision making takes place. (20)

[Total marks 40]

QUESTION 2

Values and resources influence the management process.

- a) What are values and how do they influence the management process? (10)
- b) Discuss the concept of 'human and nonhuman resource' and its importance in home management. (20)

[Total marks 30]

QUESTION 3


What factors affect time management in family systems, and discuss how? (30)

[Total marks 30]

QUESTION 4

- a) Observe the following pictures in figures (1), (2), and (3). In each case identify which one is correct and which one is wrong to do. Justify your choices. (20)

Figure 1



QUESTION 1(Compulsory)

Decision making is crucial in management. A number of components are involved in the decision making process. Discuss the elements listed below:

- a) The kind of decision under consideration (20)
- b) The situation where decision making takes place. (20)

[Total marks 40]

QUESTION 2

Values and resources influence the management process.

- a) What are values and how do they influence the management process? (10)
- b) Discuss the concept of 'human and nonhuman resource' and its importance in home management. (20)

[Total marks 30]

QUESTION 3

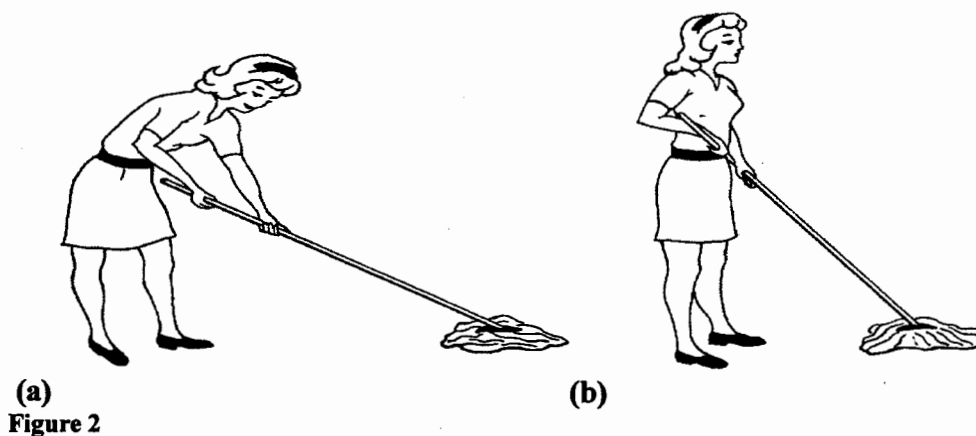
What factors affect time management in family systems, and discuss how? (30)



[Total marks 30]

QUESTION 4

- a) Observe the following pictures in figures (1), (2), and (3). In each case identify which one is correct and which one is wrong to do. Justify your choices. (20)

Figure 1



**Figure 3**

b) What is work simplification and how can it be achieved?

(10)

[Total marks 30]